






**Worksheet 3**

I. The Capacity of the Jug is 1 Litre. Will all the glasses be fully filled by the jug in each case? Put a tick against the box enough, Extra or Less.

 <p>500ml      100ml      200ml</p>	<p>Enough</p> <input data-bbox="919 353 1027 454" type="checkbox"/>	<p>More</p> <input data-bbox="1074 365 1182 465" type="checkbox"/>	<p>Less</p> <input data-bbox="1233 365 1342 488" type="checkbox"/>
 <p>500ml      500ml      500ml</p>	<p>Enough</p> <input data-bbox="919 674 1027 775" type="checkbox"/>	<p>More</p> <input data-bbox="1074 685 1182 786" type="checkbox"/>	<p>Less</p> <input data-bbox="1233 685 1342 808" type="checkbox"/>
 <p>200ml      100ml      100ml      100ml</p>	<p>Enough</p> <input data-bbox="919 1046 1027 1146" type="checkbox"/>	<p>More</p> <input data-bbox="1074 1057 1182 1158" type="checkbox"/>	<p>Less</p> <input data-bbox="1233 1057 1342 1180" type="checkbox"/>
 <p>500ml      500ml</p>	<p>Enough</p> <input data-bbox="919 1433 1027 1534" type="checkbox"/>	<p>More</p> <input data-bbox="1074 1444 1182 1545" type="checkbox"/>	<p>Less</p> <input data-bbox="1233 1444 1342 1568" type="checkbox"/>
 <p>100ml      100ml      200ml      200ml</p>	<p>Enough</p> <input data-bbox="919 1756 1027 1856" type="checkbox"/>	<p>More</p> <input data-bbox="1074 1767 1182 1868" type="checkbox"/>	<p>Less</p> <input data-bbox="1233 1767 1342 1890" type="checkbox"/>